


Jueves 24 de febrero de 2022.


Nombre.


Amor.

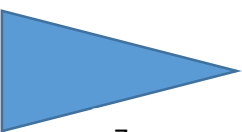
EL PERÍMETRO.

Calcular el perímetro de las figuras.

5cm  $P = L \times 4 =$
 $P = 5 \times 4 = 20\text{cm}.$

6cm  8cm
 $P = (L \times 2) + (L \times 2) =$
 $P = (6 \times 2) + (8 \times 2) =$
 $P = 12 + 16 = 28\text{cm}.$

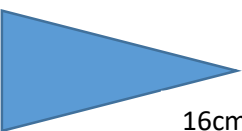
9cm  $P = L \times 3 =$
 $P = 9 \times 3 = 27\text{cm}.$

2cm  7cm
 $P = L + L + L =$
 $P = 2 + 7 + 7 = 16\text{cm}.$

10cm  $P =$

6cm  9cm
 $P =$

4cm  $P =$

11cm  16cm
 $P =$

